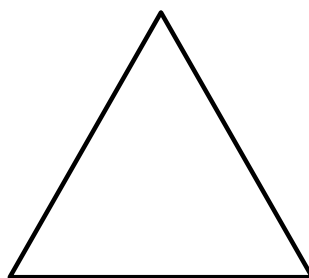










Wie heißen diese Flächen?



Wie heißen diese Körper?



$$1 \text{ km} = \underline{\hspace{2cm}} \text{ m}$$

$$1 \text{ m} = \underline{\hspace{2cm}} \text{ dm}$$

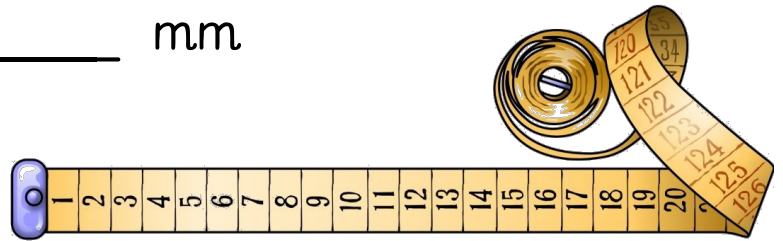
$$1 \text{ m} = \underline{\hspace{2cm}} \text{ cm}$$

$$1 \text{ m} = \underline{\hspace{2cm}} \text{ mm}$$

$$1 \text{ dm} = \underline{\hspace{2cm}} \text{ cm}$$

$$1 \text{ dm} = \underline{\hspace{2cm}} \text{ mm}$$

$$1 \text{ cm} = \underline{\hspace{2cm}} \text{ mm}$$



$$1 \text{ km} = \underline{\hspace{2cm}} \text{ m}$$

$$3 \text{ km} = \underline{\hspace{2cm}} \text{ m}$$

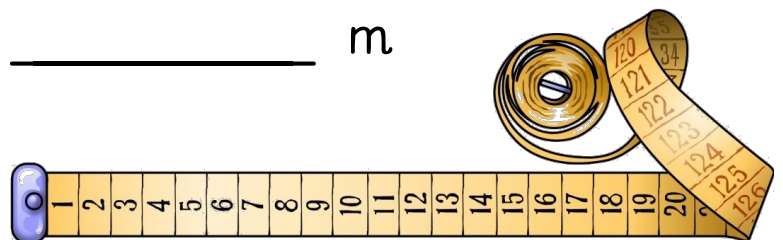
$$1 \text{ km } 345 \text{ m} = \underline{\hspace{2cm}} \text{ m}$$

$$3 \text{ km } 45 \text{ m} = \underline{\hspace{2cm}} \text{ m}$$

$$5 \text{ km } 327 \text{ m} = \underline{\hspace{2cm}} \text{ m}$$

$$4 \text{ km } 4 \text{ m} = \underline{\hspace{2cm}} \text{ m}$$

$$6 \text{ km } 60 \text{ m} = \underline{\hspace{2cm}} \text{ m}$$



$$1 \text{ m} = \underline{\hspace{2cm}} \text{ dm}$$

$$5 \text{ m} = \underline{\hspace{2cm}} \text{ dm}$$

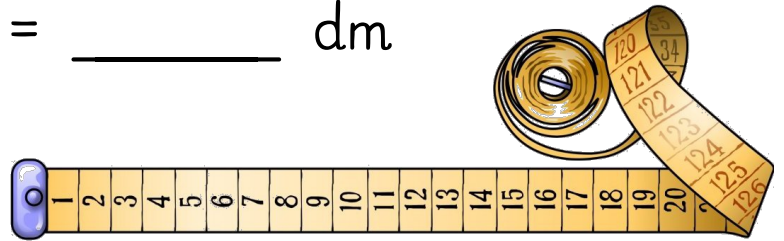
$$13 \text{ m} = \underline{\hspace{2cm}} \text{ dm}$$

$$4 \text{ m } 4 \text{ dm} = \underline{\hspace{2cm}} \text{ dm}$$

$$56 \text{ m } 6 \text{ dm} = \underline{\hspace{2cm}} \text{ dm}$$

$$23 \text{ m } 1 \text{ dm} = \underline{\hspace{2cm}} \text{ dm}$$

$$10 \text{ m } 1 \text{ dm} = \underline{\hspace{2cm}} \text{ dm}$$



$$1 \text{ dm} = \underline{\hspace{2cm}} \text{ cm}$$

$$1 \text{ dm } 2 \text{ cm} = \underline{\hspace{2cm}} \text{ cm}$$

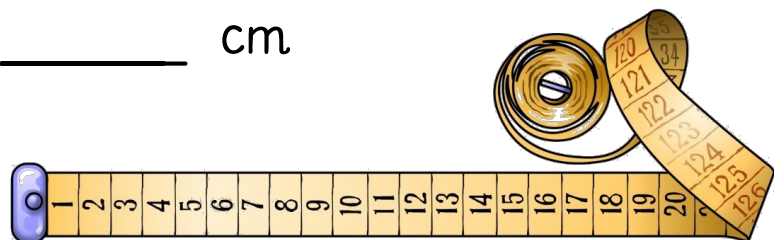
$$5 \text{ dm } 2 \text{ cm} = \underline{\hspace{2cm}} \text{ cm}$$

$$1 \text{ m } 4 \text{ dm } 6 \text{ cm} = \underline{\hspace{2cm}} \text{ cm}$$

$$6 \text{ m } 8 \text{ dm } 4 \text{ cm} = \underline{\hspace{2cm}} \text{ cm}$$

$$8 \text{ m } 9 \text{ cm} = \underline{\hspace{2cm}} \text{ cm}$$

$$7 \text{ m } 4 \text{ cm} = \underline{\hspace{2cm}} \text{ cm}$$



$$1 \text{ cm} = \underline{\hspace{2cm}} \text{ mm}$$

$$4 \text{ cm} = \underline{\hspace{2cm}} \text{ mm}$$

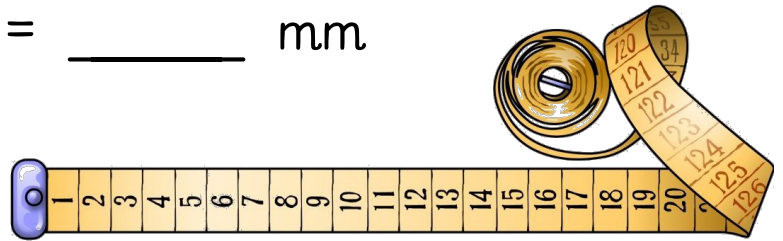
$$3 \text{ cm } 5 \text{ mm} = \underline{\hspace{2cm}} \text{ mm}$$

$$8 \text{ cm } 2 \text{ mm} = \underline{\hspace{2cm}} \text{ mm}$$

$$3 \text{ dm } 6 \text{ cm } 9 \text{ mm} = \underline{\hspace{2cm}} \text{ mm}$$

$$8 \text{ dm } 5 \text{ cm } 1 \text{ mm} = \underline{\hspace{2cm}} \text{ mm}$$

$$7 \text{ dm } 8 \text{ mm} = \underline{\hspace{2cm}} \text{ mm}$$

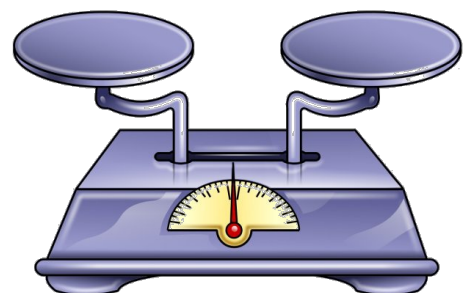


$$1 \text{ t} = \underline{\hspace{2cm}} \text{ kg}$$

$$1 \text{ kg} = \underline{\hspace{2cm}} \text{ dag}$$

$$1 \text{ kg} = \underline{\hspace{2cm}} \text{ g}$$

$$1 \text{ dag} = \underline{\hspace{2cm}} \text{ g}$$



$$1 \text{ t} = \underline{\hspace{2cm}} \text{ kg}$$

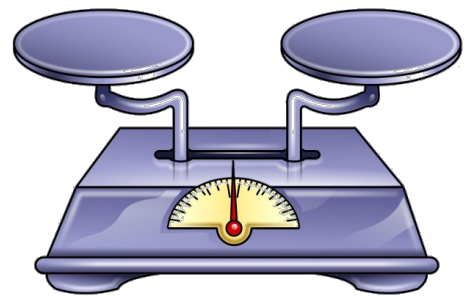
$$3 \text{ t} = \underline{\hspace{2cm}} \text{ kg}$$

$$4 \text{ t } 459 \text{ kg} = \underline{\hspace{2cm}} \text{ kg}$$

$$2 \text{ t } 35 \text{ kg} = \underline{\hspace{2cm}} \text{ kg}$$

$$6 \text{ t } 6 \text{ kg} = \underline{\hspace{2cm}} \text{ kg}$$

$$7 \text{ t } 70 \text{ kg} = \underline{\hspace{2cm}} \text{ kg}$$



$$1 \text{ kg} = \underline{\hspace{2cm}} \text{ dag}$$

$$10 \text{ kg} = \underline{\hspace{2cm}} \text{ dag}$$

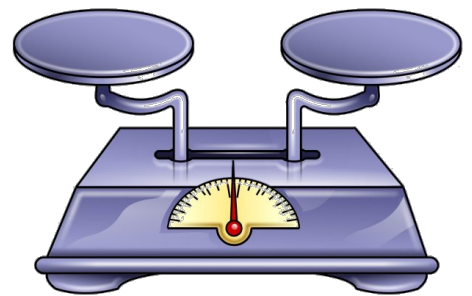
$$3 \text{ kg} = \underline{\hspace{2cm}} \text{ dag}$$

$$2 \text{ kg } 25 \text{ dag} = \underline{\hspace{2cm}} \text{ dag}$$

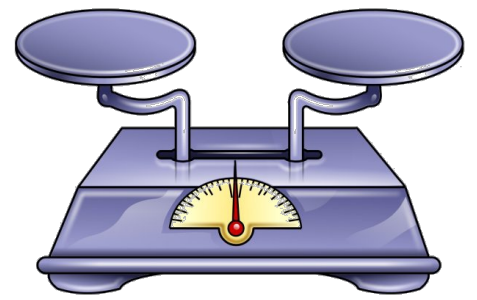
$$8 \text{ kg } 9 \text{ dag} = \underline{\hspace{2cm}} \text{ dag}$$

$$5 \text{ kg } 15 \text{ dag} = \underline{\hspace{2cm}} \text{ dag}$$

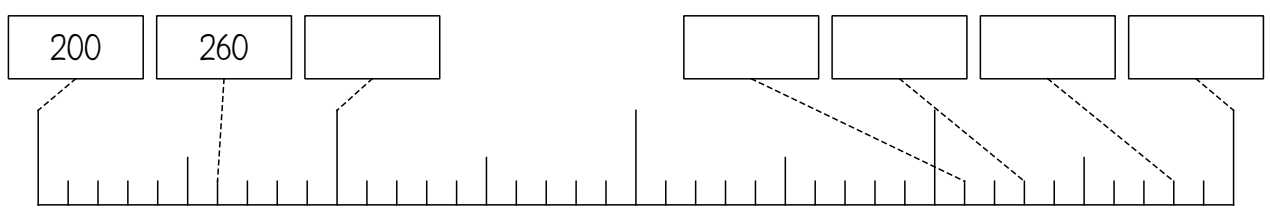
$$1 \text{ kg } 1 \text{ dag} = \underline{\hspace{2cm}} \text{ dag}$$



1 dag = \_\_\_\_\_ g  
 4 dag = \_\_\_\_\_ g  
 56 dag = \_\_\_\_\_ g  
 34 dag = \_\_\_\_\_ g  
 15 dag 8 g = \_\_\_\_\_ g  
 67 dag 7 g = \_\_\_\_\_ g



www.fraumohrsrasselbande.at www.getschoolcraft.com

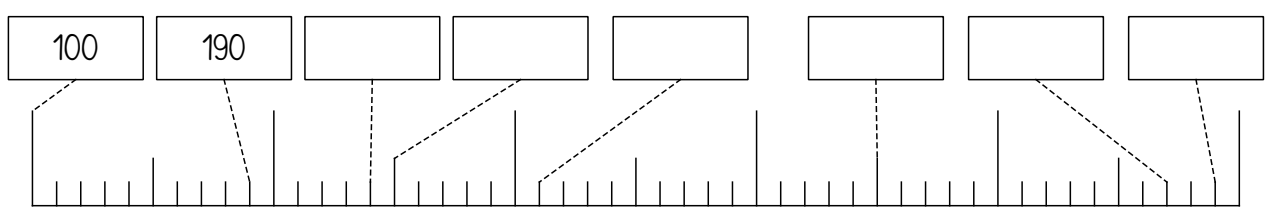


www.fraumohrsrasselbande.at www.getschoolcraft.com

# MATHEMATIK - 3. SCHULSTUFE

113

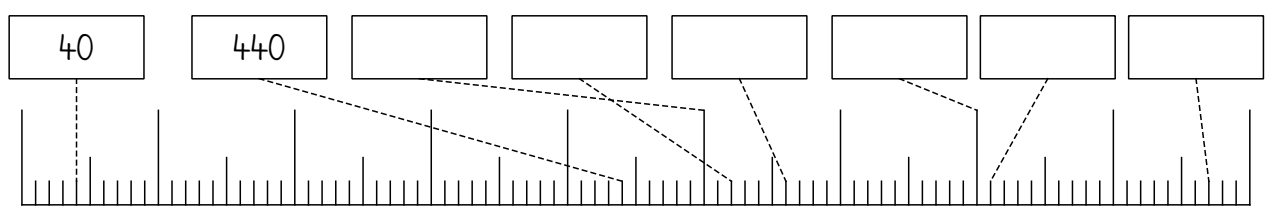
www.getschoolcraft.com  
www.fraumohrsrasselbande.at

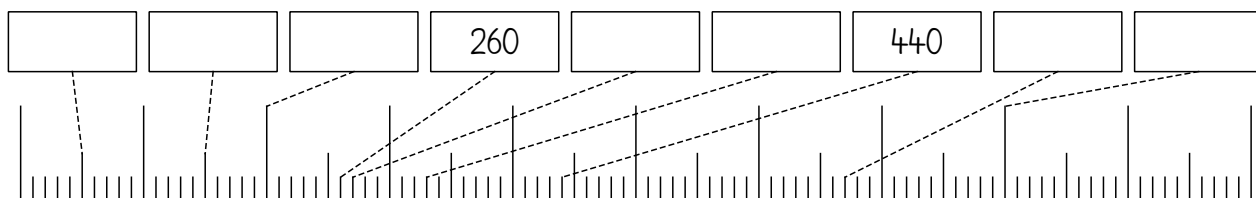
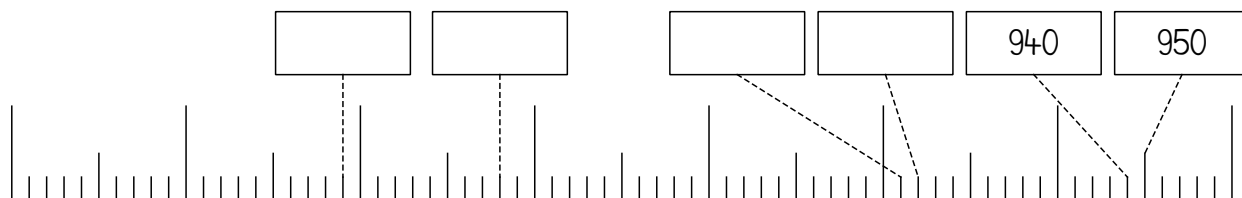


# MATHEMATIK - 3. SCHULSTUFE

114

www.getschoolcraft.com  
www.fraumohrsrasselbande.at





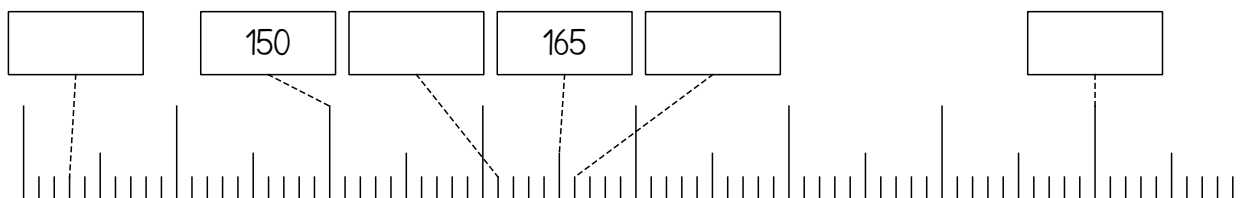


# MATHEMATIK - 3. SCHULSTUFE

117

www.getschoolcraft.com

www.fraumohrsrasselbande.at

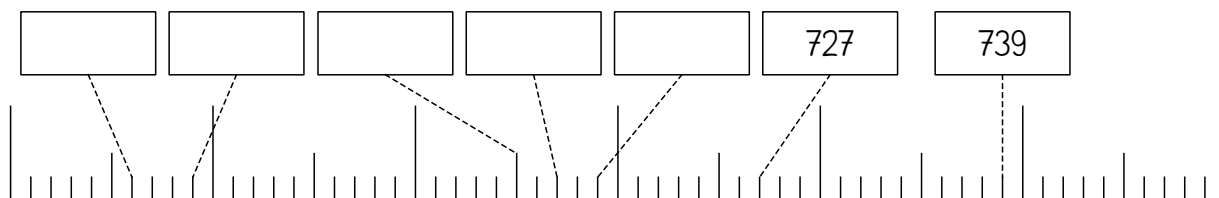


# MATHEMATIK - 3. SCHULSTUFE

118

www.getschoolcraft.com

www.fraumohrsrasselbande.at

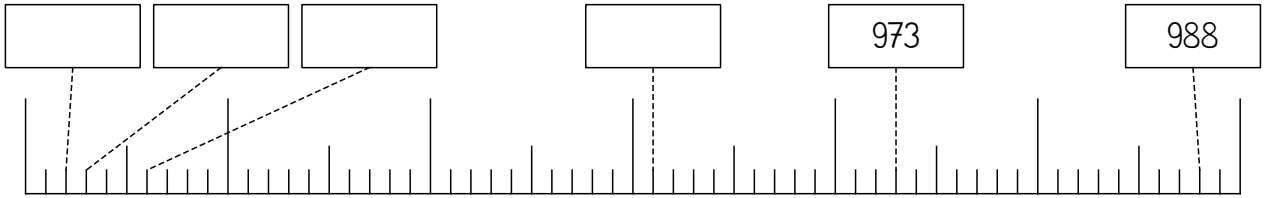


# MATHEMATIK - 3. SCHULSTUFE

119

www.getschoolcraft.com

www.fraumohrsrasselbande.at

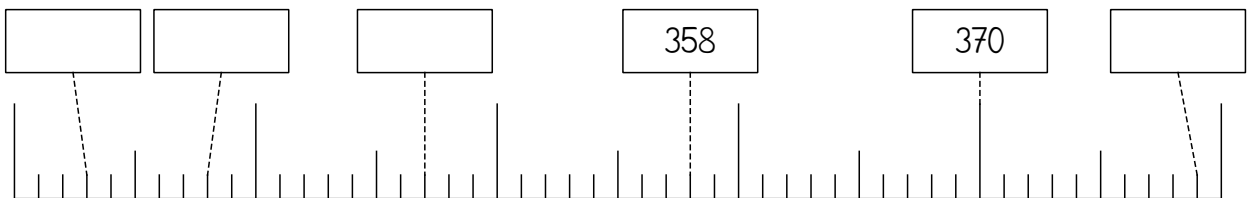


# MATHEMATIK - 3. SCHULSTUFE

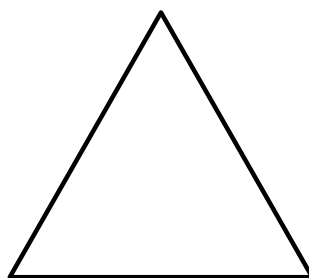


120

www.getschoolcraft.com







www.fraumohrsrasselbande.at



Wie heißen diese Flächen?



Wie heißen diese Körper?



$$1 \text{ km} = \underline{\hspace{2cm}} \text{ m}$$

$$1 \text{ m} = \underline{\hspace{2cm}} \text{ dm}$$

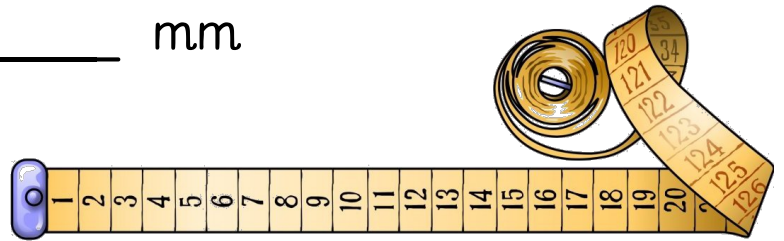
$$1 \text{ m} = \underline{\hspace{2cm}} \text{ cm}$$

$$1 \text{ m} = \underline{\hspace{2cm}} \text{ mm}$$

$$1 \text{ dm} = \underline{\hspace{2cm}} \text{ cm}$$

$$1 \text{ dm} = \underline{\hspace{2cm}} \text{ mm}$$

$$1 \text{ cm} = \underline{\hspace{2cm}} \text{ mm}$$



$$1 \text{ km} = \underline{\hspace{2cm}} \text{ m}$$

$$3 \text{ km} = \underline{\hspace{2cm}} \text{ m}$$

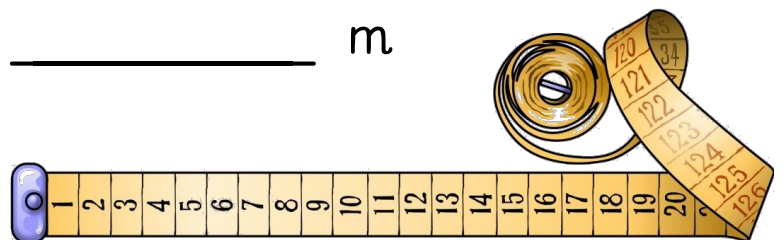
$$1 \text{ km } 345 \text{ m} = \underline{\hspace{2cm}} \text{ m}$$

$$3 \text{ km } 45 \text{ m} = \underline{\hspace{2cm}} \text{ m}$$

$$5 \text{ km } 327 \text{ m} = \underline{\hspace{2cm}} \text{ m}$$

$$4 \text{ km } 4 \text{ m} = \underline{\hspace{2cm}} \text{ m}$$

$$6 \text{ km } 60 \text{ m} = \underline{\hspace{2cm}} \text{ m}$$



$$1 \text{ m} = \underline{\quad\quad} \text{ dm}$$

$$5 \text{ m} = \underline{\quad\quad} \text{ dm}$$

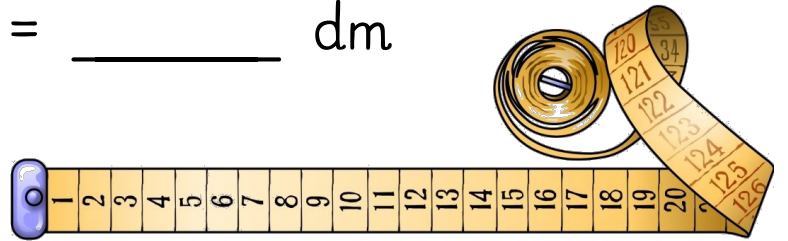
$$13 \text{ m} = \underline{\quad\quad\quad} \text{ dm}$$

$$4 \text{ m } 4 \text{ dm} = \underline{\quad\quad\quad} \text{ dm}$$

$$56 \text{ m } 6 \text{ dm} = \underline{\quad\quad\quad} \text{ dm}$$

$$23 \text{ m } 1 \text{ dm} = \underline{\quad\quad\quad} \text{ dm}$$

$$10 \text{ m } 1 \text{ dm} = \underline{\quad\quad\quad} \text{ dm}$$



$$1 \text{ dm} = \underline{\quad\quad} \text{ cm}$$

$$1 \text{ dm } 2 \text{ cm} = \underline{\quad\quad\quad} \text{ cm}$$

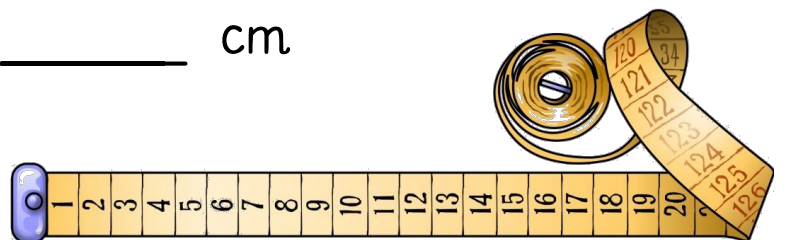
$$5 \text{ dm } 2 \text{ cm} = \underline{\quad\quad\quad} \text{ cm}$$

$$1 \text{ m } 4 \text{ dm } 6 \text{ cm} = \underline{\quad\quad\quad} \text{ cm}$$

$$6 \text{ m } 8 \text{ dm } 4 \text{ cm} = \underline{\quad\quad\quad} \text{ cm}$$

$$8 \text{ m } 9 \text{ cm} = \underline{\quad\quad\quad} \text{ cm}$$

$$7 \text{ m } 4 \text{ cm} = \underline{\quad\quad\quad} \text{ cm}$$



$$1 \text{ cm} = \underline{\hspace{2cm}} \text{ mm}$$

$$4 \text{ cm} = \underline{\hspace{2cm}} \text{ mm}$$

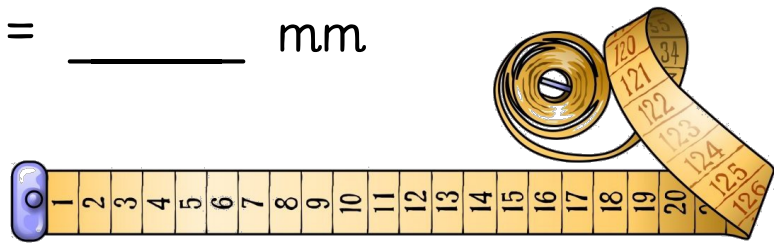
$$3 \text{ cm } 5 \text{ mm} = \underline{\hspace{2cm}} \text{ mm}$$

$$8 \text{ cm } 2 \text{ mm} = \underline{\hspace{2cm}} \text{ mm}$$

$$3 \text{ dm } 6 \text{ cm } 9 \text{ mm} = \underline{\hspace{2cm}} \text{ mm}$$

$$8 \text{ dm } 5 \text{ cm } 1 \text{ mm} = \underline{\hspace{2cm}} \text{ mm}$$

$$7 \text{ dm } 8 \text{ mm} = \underline{\hspace{2cm}} \text{ mm}$$

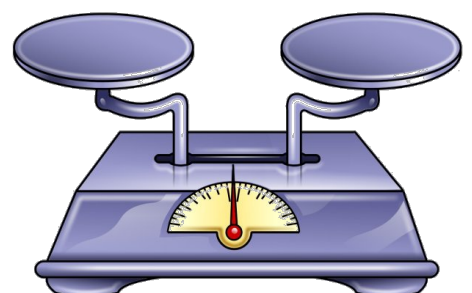


$$1 \text{ t} = \underline{\hspace{2cm}} \text{ kg}$$

$$1 \text{ kg} = \underline{\hspace{2cm}} \text{ dag}$$

$$1 \text{ kg} = \underline{\hspace{2cm}} \text{ g}$$

$$1 \text{ dag} = \underline{\hspace{2cm}} \text{ g}$$



$$1 \text{ t} = \underline{\hspace{2cm}} \text{ kg}$$

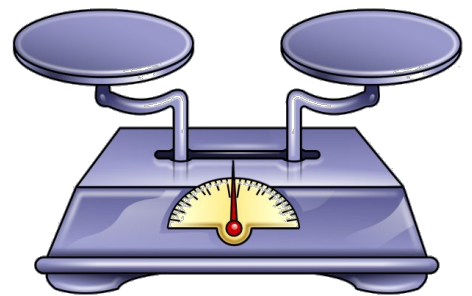
$$3 \text{ t} = \underline{\hspace{2cm}} \text{ kg}$$

$$4 \text{ t } 459 \text{ kg} = \underline{\hspace{2cm}} \text{ kg}$$

$$2 \text{ t } 35 \text{ kg} = \underline{\hspace{2cm}} \text{ kg}$$

$$6 \text{ t } 6 \text{ kg} = \underline{\hspace{2cm}} \text{ kg}$$

$$7 \text{ t } 70 \text{ kg} = \underline{\hspace{2cm}} \text{ kg}$$



$$1 \text{ kg} = \underline{\hspace{2cm}} \text{ dag}$$

$$10 \text{ kg} = \underline{\hspace{2cm}} \text{ dag}$$

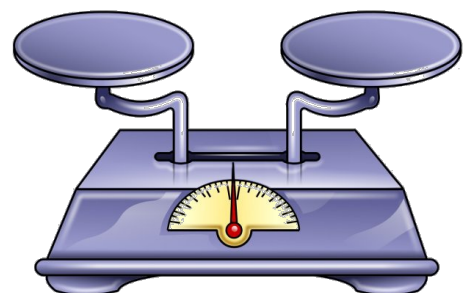
$$3 \text{ kg} = \underline{\hspace{2cm}} \text{ dag}$$

$$2 \text{ kg } 25 \text{ dag} = \underline{\hspace{2cm}} \text{ dag}$$

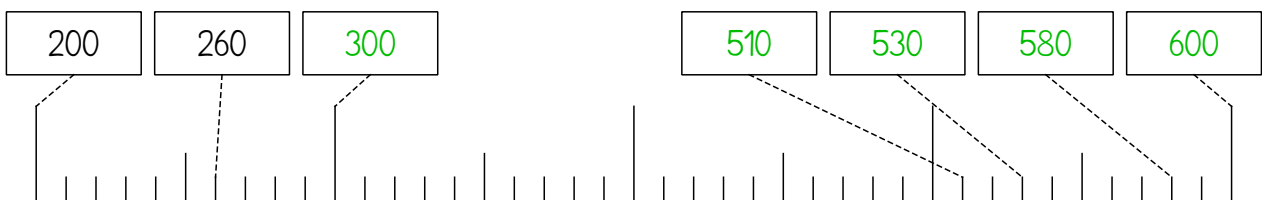
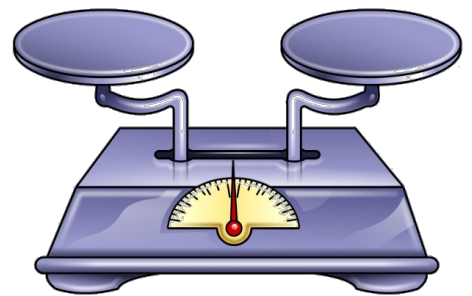
$$8 \text{ kg } 9 \text{ dag} = \underline{\hspace{2cm}} \text{ dag}$$

$$5 \text{ kg } 15 \text{ dag} = \underline{\hspace{2cm}} \text{ dag}$$

$$1 \text{ kg } 1 \text{ dag} = \underline{\hspace{2cm}} \text{ dag}$$



1 dag = \_\_\_\_\_ g  
 4 dag = \_\_\_\_\_ g  
 56 dag = \_\_\_\_\_ g  
 34 dag = \_\_\_\_\_ g  
 15 dag 8 g = \_\_\_\_\_ g  
 67 dag 7 g = \_\_\_\_\_ g



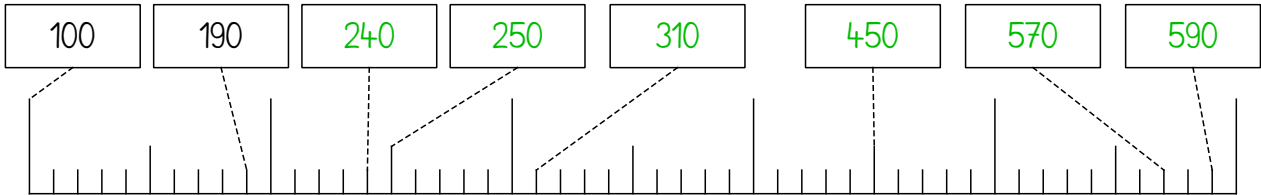


# MATHEMATIK - 3. SCHULSTUFE

113

www.getschoolcraft.com

www.fraumohrsrasselbande.at

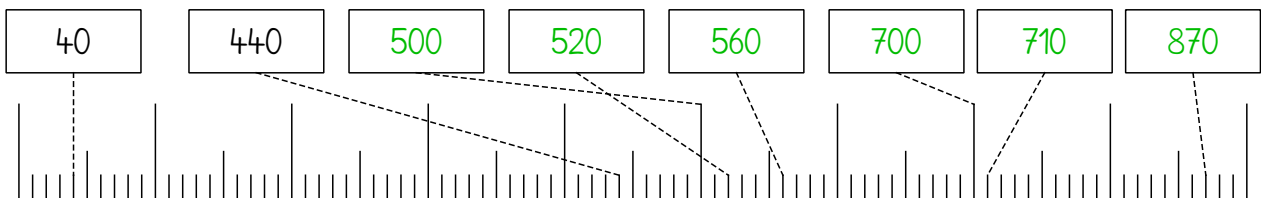


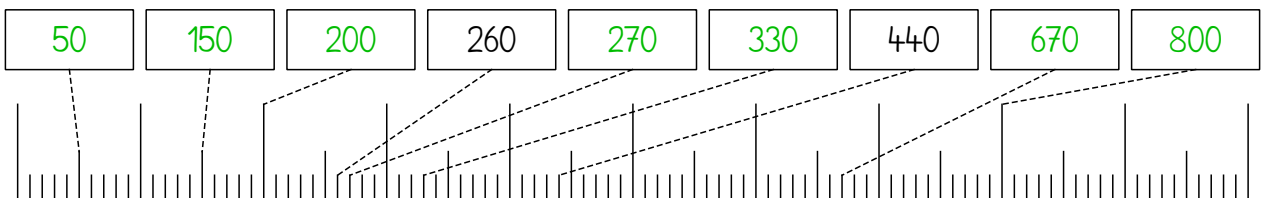
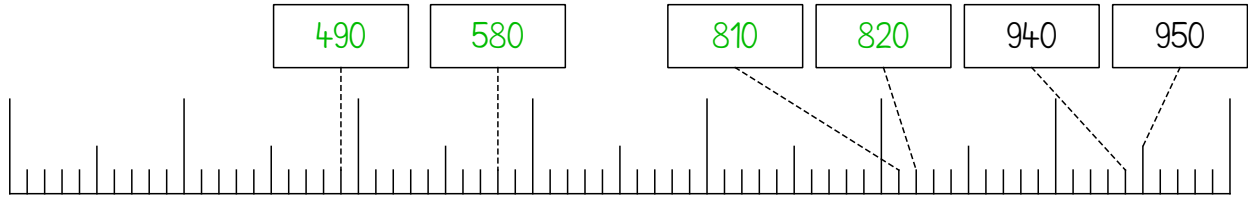
# MATHEMATIK - 3. SCHULSTUFE

114

www.getschoolcraft.com

www.fraumohrsrasselbande.at



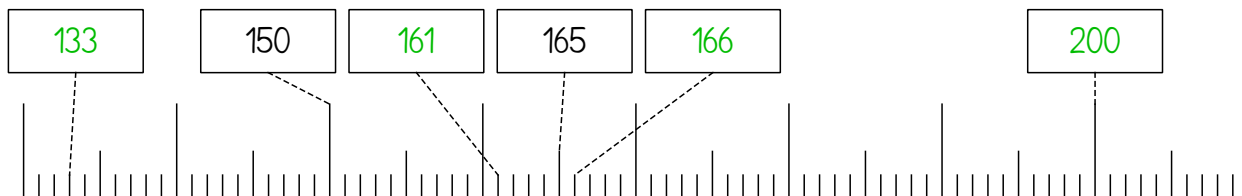


# MATHEMATIK - 3. SCHULSTUFE

117

www.getschoolcraft.com

www.fraumohrsrasselbande.at

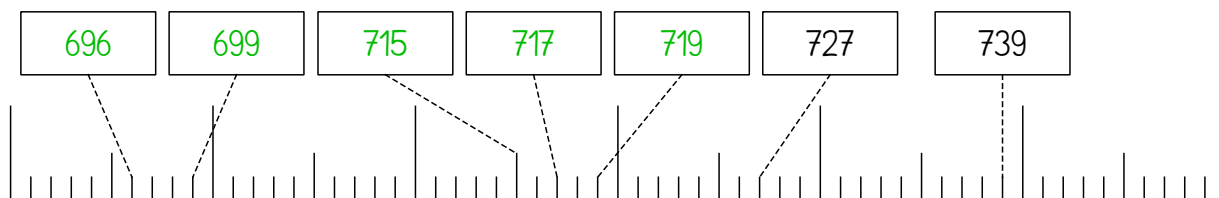


# MATHEMATIK - 3. SCHULSTUFE

118

www.getschoolcraft.com

www.fraumohrsrasselbande.at

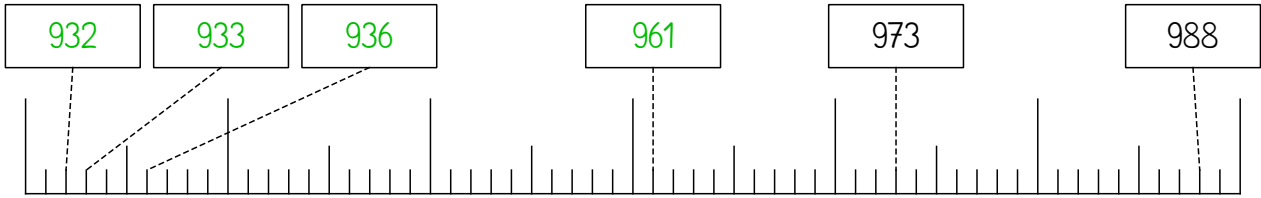


# MATHEMATIK - 3. SCHULSTUFE

119

www.getschoolcraft.com

www.fraumohrsrasselbande.at



# MATHEMATIK - 3. SCHULSTUFE

120

www.getschoolcraft.com

www.fraumohrsrasselbande.at

