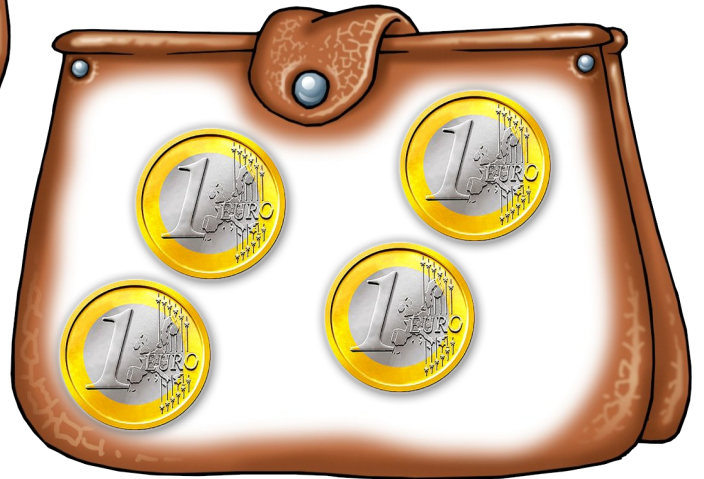


MATHEMATIK - GRÖßEN 2. Klasse

1

www.getschoolcraft.com

www.fraumohrstrasselbande.at



MATHEMATIK - GRÖßEN 2. Klasse

2

www.getschoolcraft.com

www.fraumohrstrasselbande.at



MATHEMATIK - GRÖßEN 2. Klasse

3

www.getschoolcraft.com

www.fraunmohrsrasselbande.at



MATHEMATIK - GRÖßEN 2. Klasse

4

www.getschoolcraft.com

www.fraunmohrsrasselbande.at




MATHEMATIK - GRÖßEN 2. Klasse

5

www.getschoolcraft.com

www.frau.mohr.srassemblbande.at



MATHEMATIK - GRÖßEN 2. Klasse

6

www.getschoolcraft.com

www.frau.mohr.srassemblbande.at




MATHEMATIK - GRÖßEN 2. Klasse

7



MATHEMATIK - GRÖßEN 2. Klasse

8



MATHEMATIK - GRÖßEN 2. Klasse

9

www.getschoolcraft.com

www.frau.mohr.sraselbande.at



MATHEMATIK - GRÖßEN 2. Klasse

10

www.getschoolcraft.com

www.frau.mohr.sraselbande.at



MATHEMATIK - GRÖßEN 2. Klasse

11

www.getschoolcraft.com

www.frau.mohr.sraselbande.at



MATHEMATIK - GRÖßEN 2. Klasse

12

www.getschoolcraft.com

www.frau.mohr.sraselbande.at



MATHEMATIK - GRÖßEN 2. Klasse

13

www.getschoolcraft.com

www.fraumohrstrasselbande.at



MATHEMATIK - GRÖßEN 2. Klasse

14

www.getschoolcraft.com

www.fraumohrstrasselbande.at



MATHEMATIK - GRÖßEN 2. Klasse

15



MATHEMATIK - GRÖßEN 2. Klasse

16



MATHEMATIK - GRÖßEN 2. Klasse

17

www.getschoolcraft.com

www.fraumohrstrasselbande.at



MATHEMATIK - GRÖßEN 2. Klasse

18

www.getschoolcraft.com

www.fraumohrstrasselbande.at



MATHEMATIK - GRÖßEN 2. Klasse

19

www.getschoolcraft.com

www.fraumohrsrasselbande.at



MATHEMATIK - GRÖßEN 2. Klasse

20

www.getschoolcraft.com

www.fraumohrsrasselbande.at



MATHEMATIK - GRÖßEN 2. Klasse

21

www.getschoolcraft.com

www.frau.mohr.srassemblbande.at



MATHEMATIK - GRÖßEN 2. Klasse

22

www.getschoolcraft.com

www.frau.mohr.srassemblbande.at



MATHEMATIK - GRÖßEN 2. Klasse

23

$23 \text{ €} + 35 \text{ €} = \underline{\quad} \text{ €}$

$54 \text{ €} + 21 \text{ €} = \underline{\quad} \text{ €}$

$56 \text{ €} + 41 \text{ €} = \underline{\quad} \text{ €}$

$36 \text{ €} + 53 \text{ €} = \underline{\quad} \text{ €}$

$13 \text{ €} + 66 \text{ €} = \underline{\quad} \text{ €}$

$74 \text{ €} + 26 \text{ €} = \underline{\quad} \text{ €}$

$52 \text{ €} + 28 \text{ €} = \underline{\quad} \text{ €}$

$65 \text{ €} + 32 \text{ €} = \underline{\quad} \text{ €}$

$72 \text{ €} + 14 \text{ €} = \underline{\quad} \text{ €}$

$81 \text{ €} + 16 \text{ €} = \underline{\quad} \text{ €}$

$57 \text{ €} + 42 \text{ €} = \underline{\quad} \text{ €}$

$35 \text{ €} + 45 \text{ €} = \underline{\quad} \text{ €}$

$82 \text{ €} + 12 \text{ €} = \underline{\quad} \text{ €}$

$57 \text{ €} + 43 \text{ €} = \underline{\quad} \text{ €}$

MATHEMATIK - GRÖßEN 2. Klasse

24

$23 \text{ €} + 8 \text{ €} = \underline{\quad} \text{ €}$

$54 \text{ €} + 8 \text{ €} = \underline{\quad} \text{ €}$

$56 \text{ €} + 7 \text{ €} = \underline{\quad} \text{ €}$

$36 \text{ €} + 5 \text{ €} = \underline{\quad} \text{ €}$

$13 \text{ €} + 9 \text{ €} = \underline{\quad} \text{ €}$

$74 \text{ €} + 7 \text{ €} = \underline{\quad} \text{ €}$

$52 \text{ €} + 9 \text{ €} = \underline{\quad} \text{ €}$

$65 \text{ €} + 6 \text{ €} = \underline{\quad} \text{ €}$

$75 \text{ €} + 7 \text{ €} = \underline{\quad} \text{ €}$

$88 \text{ €} + 3 \text{ €} = \underline{\quad} \text{ €}$

$57 \text{ €} + 6 \text{ €} = \underline{\quad} \text{ €}$

$35 \text{ €} + 9 \text{ €} = \underline{\quad} \text{ €}$

$82 \text{ €} + 9 \text{ €} = \underline{\quad} \text{ €}$

$57 \text{ €} + 7 \text{ €} = \underline{\quad} \text{ €}$

MATHEMATIK - GRÖßEN 2. Klasse

25

$30 \text{ c} + \underline{\quad\quad} = 1 \text{ €}$

$80 \text{ c} + \underline{\quad\quad} = 1 \text{ €}$

$40 \text{ c} + \underline{\quad\quad} = 1 \text{ €}$

$50 \text{ c} + \underline{\quad\quad} = 1 \text{ €}$

$50 \text{ c} + \underline{\quad\quad} = 1 \text{ €}$

$30 \text{ c} + \underline{\quad\quad} = 1 \text{ €}$

$70 \text{ c} + \underline{\quad\quad} = 1 \text{ €}$

$60 \text{ c} + \underline{\quad\quad} = 1 \text{ €}$

$10 \text{ c} + \underline{\quad\quad} = 1 \text{ €}$

$90 \text{ c} + \underline{\quad\quad} = 1 \text{ €}$

$20 \text{ c} + \underline{\quad\quad} = 1 \text{ €}$

$40 \text{ c} + \underline{\quad\quad} = 1 \text{ €}$

$60 \text{ c} + \underline{\quad\quad} = 1 \text{ €}$

$10 \text{ c} + \underline{\quad\quad} = 1 \text{ €}$

MATHEMATIK - GRÖßEN 2. Klasse

26

$35 \text{ c} + \underline{\quad\quad} = 1 \text{ €}$

$81 \text{ c} + \underline{\quad\quad} = 1 \text{ €}$

$42 \text{ c} + \underline{\quad\quad} = 1 \text{ €}$

$58 \text{ c} + \underline{\quad\quad} = 1 \text{ €}$

$57 \text{ c} + \underline{\quad\quad} = 1 \text{ €}$

$34 \text{ c} + \underline{\quad\quad} = 1 \text{ €}$

$76 \text{ c} + \underline{\quad\quad} = 1 \text{ €}$

$62 \text{ c} + \underline{\quad\quad} = 1 \text{ €}$

$12 \text{ c} + \underline{\quad\quad} = 1 \text{ €}$

$99 \text{ c} + \underline{\quad\quad} = 1 \text{ €}$

$24 \text{ c} + \underline{\quad\quad} = 1 \text{ €}$


$48 \text{ c} + \underline{\quad\quad} = 1 \text{ €}$

$66 \text{ c} + \underline{\quad\quad} = 1 \text{ €}$

$17 \text{ c} + \underline{\quad\quad} = 1 \text{ €}$

MATHEMATIK - GRÖßEN 2. Klasse

27



MATHEMATIK - GRÖßEN 2. Klasse

28



MATHEMATIK - GRÖßEN 2. Klasse

29

www.fraunmohrsrasselbande.at www.getschoolcraft.com




MATHEMATIK - GRÖßEN 2. Klasse

30

www.fraunmohrsrasselbande.at www.getschoolcraft.com













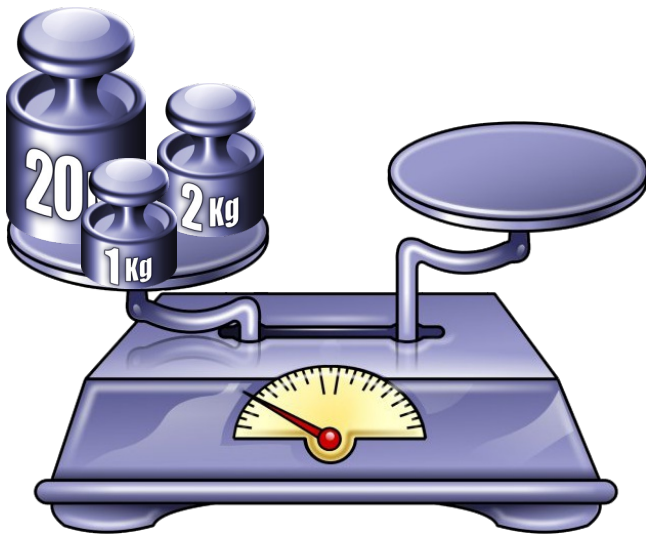

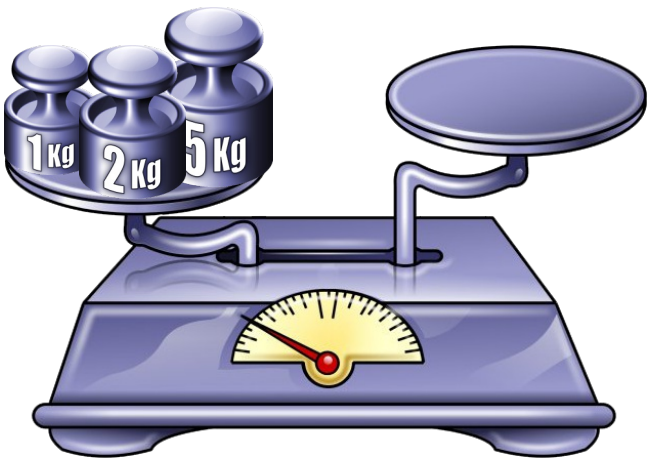
GRAMM


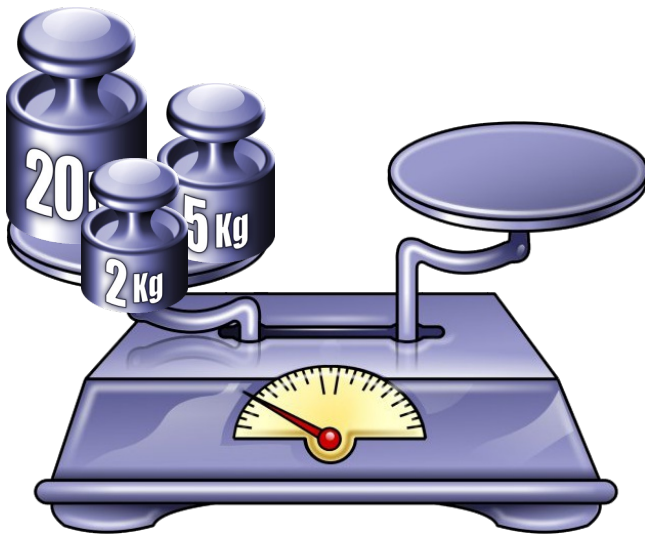


DEKAGRAMM




KILOGRAMM











MATHEMATIK - GRÖßEN 2. Klasse

41

$$10 \text{ g} = 1 \text{ dag}$$

$$20 \text{ g} = \underline{\quad} \text{ dag}$$

$$30 \text{ g} = \underline{\quad} \text{ dag}$$

$$40 \text{ g} = \underline{\quad} \text{ dag}$$

$$50 \text{ g} = \underline{\quad} \text{ dag}$$

$$60 \text{ g} = \underline{\quad} \text{ dag}$$

$$70 \text{ g} = \underline{\quad} \text{ dag}$$

$$80 \text{ g} = \underline{\quad} \text{ dag}$$

$$90 \text{ g} = \underline{\quad} \text{ dag}$$

$$100 \text{ g} = \underline{\quad} \text{ dag}$$

MATHEMATIK - GRÖßEN 2. Klasse

42

$$1 \text{ dag} = 10 \text{ g}$$

$$2 \text{ dag} = \underline{\quad} \text{ g}$$

$$3 \text{ dag} = \underline{\quad} \text{ g}$$

$$4 \text{ dag} = \underline{\quad} \text{ g}$$

$$5 \text{ dag} = \underline{\quad} \text{ g}$$

$$6 \text{ dag} = \underline{\quad} \text{ g}$$

$$7 \text{ dag} = \underline{\quad} \text{ g}$$

$$8 \text{ dag} = \underline{\quad} \text{ g}$$

$$9 \text{ dag} = \underline{\quad} \text{ g}$$

$$10 \text{ dag} = \underline{\quad} \text{ g}$$

MATHEMATIK - GRÖßEN 2. Klasse

43

$$100 \text{ dag} = 1 \text{ kg}$$

$$40 \text{ dag} + \underline{\quad\quad} = 1 \text{ kg}$$

$$60 \text{ dag} + \underline{\quad\quad} = 1 \text{ kg}$$

$$70 \text{ dag} + \underline{\quad\quad} = 1 \text{ kg}$$

$$30 \text{ dag} + \underline{\quad\quad} = 1 \text{ kg}$$

$$80 \text{ dag} + \underline{\quad\quad} = 1 \text{ kg}$$

$$50 \text{ dag} + \underline{\quad\quad} = 1 \text{ kg}$$

$$20 \text{ dag} + \underline{\quad\quad} = 1 \text{ kg}$$

$$10 \text{ dag} + \underline{\quad\quad} = 1 \text{ kg}$$

$$90 \text{ dag} + \underline{\quad\quad} = 1 \text{ kg}$$

MATHEMATIK - GRÖßEN 2. Klasse

44

$$100 \text{ dag} = 1 \text{ kg}$$

$$42 \text{ dag} + \underline{\quad\quad} = 1 \text{ kg}$$

$$64 \text{ dag} + \underline{\quad\quad} = 1 \text{ kg}$$

$$75 \text{ dag} + \underline{\quad\quad} = 1 \text{ kg}$$

$$38 \text{ dag} + \underline{\quad\quad} = 1 \text{ kg}$$

$$82 \text{ dag} + \underline{\quad\quad} = 1 \text{ kg}$$

$$55 \text{ dag} + \underline{\quad\quad} = 1 \text{ kg}$$

$$26 \text{ dag} + \underline{\quad\quad} = 1 \text{ kg}$$

$$19 \text{ dag} + \underline{\quad\quad} = 1 \text{ kg}$$

$$92 \text{ dag} + \underline{\quad\quad} = 1 \text{ kg}$$



1 l = 1 Liter

Flüssigkeiten misst man mit der Maßeinheit

LITER.



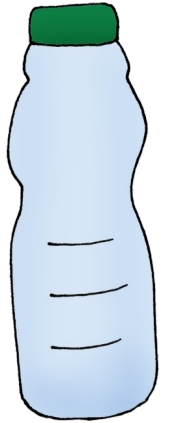
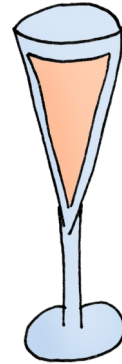


Was glaubst du? Wie viele Liter passen hinein?



MATHEMATIK - GRÖßEN 2. Klasse

47

Was glaubst du? Wie viele Liter passen hinein?



MATHEMATIK - GRÖßEN 2. Klasse

48


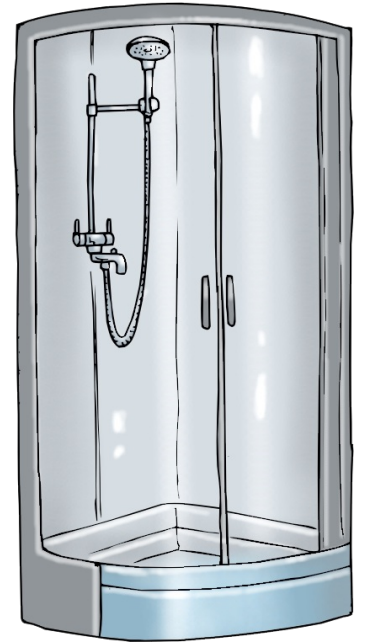
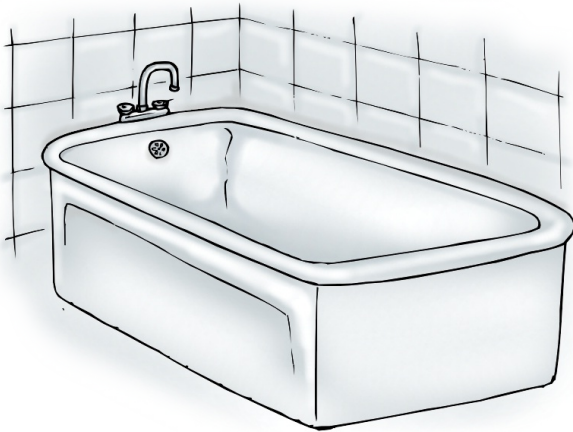
Was glaubst du? Ist das mehr oder weniger als ein Liter oder vielleicht auch ganz genau ein Liter?



MATHEMATIK - GRÖßEN 2. Klasse

49

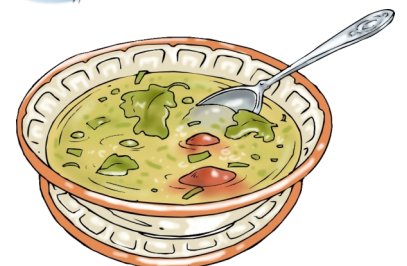


Was glaubst du? Wie viele Liter braucht man?



MATHEMATIK - GRÖßEN 2. Klasse


50

Was glaubst du? Ist das mehr oder weniger als ein Liter oder vielleicht auch ganz genau ein Liter?






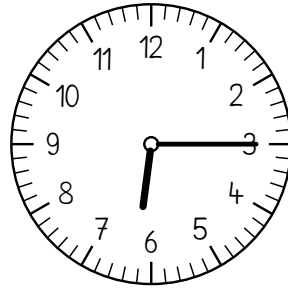
Die Uhrzeit gibt man in
Stunden und Minuten
an!



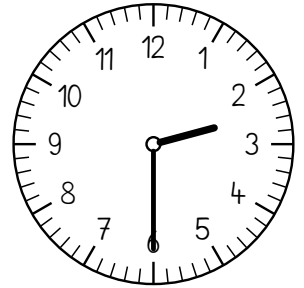
_____ Uhr



_____ Uhr




_____ Uhr




_____ Uhr




Wie spät ist es?




_____ Uhr



_____ Uhr




_____ Uhr



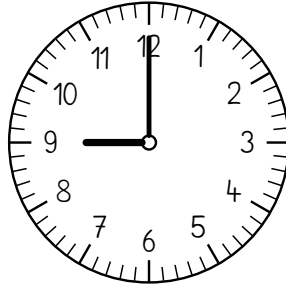
_____ Uhr




Wie spät ist es?




_____ Uhr



_____ Uhr




_____ Uhr




_____ Uhr




Wie spät ist es?




_____ Uhr



_____ Uhr



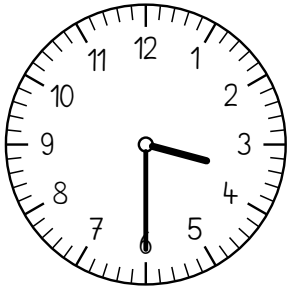
_____ Uhr




_____ Uhr




Wie spät ist es?




Uhr



Uhr




Uhr




Uhr




Wie spät ist es?




Uhr



Uhr




Uhr




Uhr




Wie spät ist es?




_____ Uhr



_____ Uhr




_____ Uhr




_____ Uhr




Wie spät ist es?




_____ Uhr



_____ Uhr




_____ Uhr




_____ Uhr




Wie spät ist es?




_____ Uhr



_____ Uhr




_____ Uhr



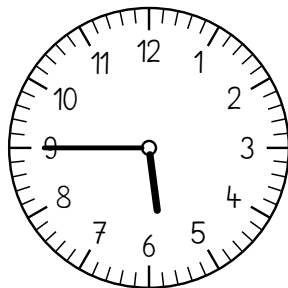
_____ Uhr




Wie spät ist es?




_____ Uhr



_____ Uhr



_____ Uhr



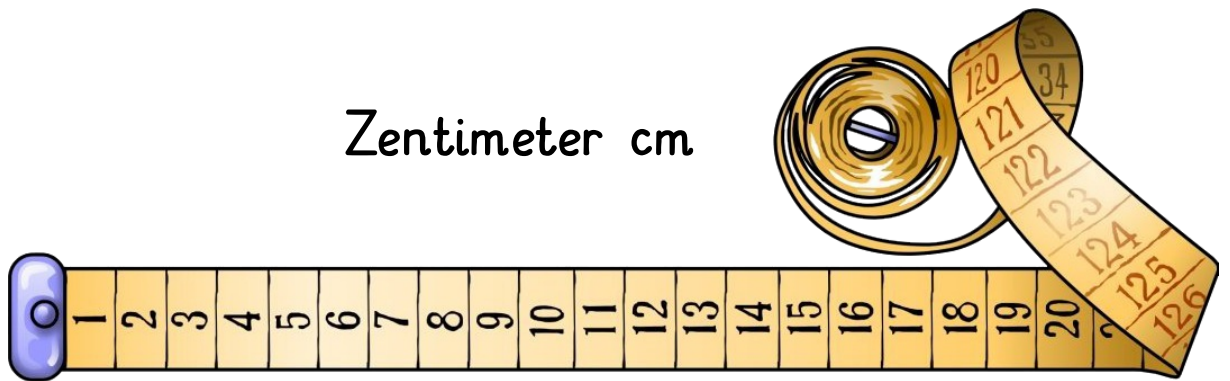
_____ Uhr

Wenn man wissen will, wie lang oder breit oder wie hoch etwas ist, benutzt man zum Messen die **Längenmaße.**

Meter m

Dezimeter dm

Zentimeter cm





Was glaubst du? Wie viele Meter sind das?



Was glaubst du? Größer oder kleiner als 1 m?

63



Was glaubst du? Größer oder kleiner als 1 m?

64


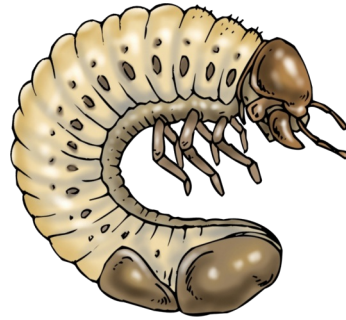



Was glaubst du? Mehr oder weniger als 1 cm?

65

www.getschoolcraft.com

www.fraumohrrasselbande.at



Was glaubst du? Wie viele cm sind das?

66

www.getschoolcraft.com

www.fraumohrrasselbande.at



MATHEMATIK - GRÖßEN 2. Klasse

67

$$10 \text{ cm} = 1 \text{ dm}$$

$$20 \text{ cm} = \underline{\quad} \text{ dm}$$

$$30 \text{ cm} = \underline{\quad} \text{ dm}$$

$$40 \text{ cm} = \underline{\quad} \text{ dm}$$

$$50 \text{ cm} = \underline{\quad} \text{ dm}$$

$$60 \text{ cm} = \underline{\quad} \text{ dm}$$

$$70 \text{ cm} = \underline{\quad} \text{ dm}$$

$$80 \text{ cm} = \underline{\quad} \text{ dm}$$

$$90 \text{ cm} = \underline{\quad} \text{ dm}$$

$$100 \text{ cm} = \underline{\quad} \text{ dm}$$

MATHEMATIK - GRÖßEN 2. Klasse

68

$$1 \text{ dm} = 10 \text{ cm}$$

$$2 \text{ dm} = \underline{\quad} \text{ cm}$$

$$3 \text{ dm} = \underline{\quad} \text{ cm}$$

$$4 \text{ dm} = \underline{\quad} \text{ cm}$$

$$5 \text{ dm} = \underline{\quad} \text{ cm}$$

$$6 \text{ dm} = \underline{\quad} \text{ cm}$$

$$7 \text{ dm} = \underline{\quad} \text{ cm}$$

$$8 \text{ dm} = \underline{\quad} \text{ cm}$$

$$9 \text{ dm} = \underline{\quad} \text{ cm}$$

$$10 \text{ dm} = \underline{\quad} \text{ cm}$$

$$10 \text{ dm} = 1 \text{ m}$$

$$20 \text{ dm} = \underline{\quad} \text{ m}$$

$$30 \text{ dm} = \underline{\quad} \text{ m}$$

$$40 \text{ dm} = \underline{\quad} \text{ m}$$

$$50 \text{ dm} = \underline{\quad} \text{ m}$$

$$60 \text{ dm} = \underline{\quad} \text{ m}$$

$$70 \text{ dm} = \underline{\quad} \text{ m}$$

$$80 \text{ dm} = \underline{\quad} \text{ m}$$

$$90 \text{ dm} = \underline{\quad} \text{ m}$$

$$100 \text{ dm} = \underline{\quad} \text{ m}$$

$$1 \text{ m} = 10 \text{ dm}$$

$$2 \text{ m} = \underline{\quad} \text{ dm}$$

$$3 \text{ m} = \underline{\quad} \text{ dm}$$

$$4 \text{ m} = \underline{\quad} \text{ dm}$$

$$5 \text{ m} = \underline{\quad} \text{ dm}$$

$$6 \text{ m} = \underline{\quad} \text{ dm}$$

$$7 \text{ m} = \underline{\quad} \text{ dm}$$

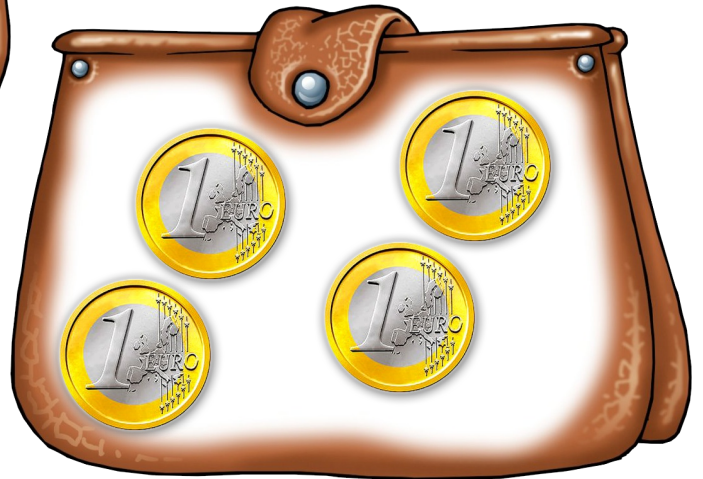
$$8 \text{ m} = \underline{\quad} \text{ dm}$$

$$9 \text{ m} = \underline{\quad} \text{ dm}$$

$$10 \text{ m} = \underline{\quad} \text{ dm}$$

MATHEMATIK - GRÖßEN 2. Klasse

1



MATHEMATIK - GRÖßEN 2. Klasse

2



MATHEMATIK - GRÖßEN 2. Klasse

3

www.getschoolcraft.com

www.fraunmohrsrasselbande.at



MATHEMATIK - GRÖßEN 2. Klasse

4

www.getschoolcraft.com

www.fraunmohrsrasselbande.at




MATHEMATIK - GRÖßEN 2. Klasse

5

www.getschoolcraft.com

www.fraunmohrsrasselbande.at



MATHEMATIK - GRÖßEN 2. Klasse

6

www.getschoolcraft.com

www.fraunmohrsrasselbande.at




MATHEMATIK - GRÖßEN 2. Klasse

7



MATHEMATIK - GRÖßEN 2. Klasse

8



MATHEMATIK - GRÖßEN 2. Klasse

9

www.getschoolcraft.com

www.frau.mohr.sraselbande.at



MATHEMATIK - GRÖßEN 2. Klasse

10

www.getschoolcraft.com

www.frau.mohr.sraselbande.at



MATHEMATIK - GRÖßEN 2. Klasse

11

www.getschoolcraft.com

www.frau.mohr.sasselbande.at



MATHEMATIK - GRÖßEN 2. Klasse

12

www.getschoolcraft.com

www.frau.mohr.sasselbande.at



MATHEMATIK - GRÖßEN 2. Klasse

13

www.getschoolcraft.com

www.fraumohrstrasselbande.at



MATHEMATIK - GRÖßEN 2. Klasse

14

www.getschoolcraft.com

www.fraumohrstrasselbande.at



MATHEMATIK - GRÖßEN 2. Klasse

15



MATHEMATIK - GRÖßEN 2. Klasse

16



MATHEMATIK - GRÖßEN 2. Klasse

17

www.getschoolcraft.com

www.fraumohrstrasselbande.at



MATHEMATIK - GRÖßEN 2. Klasse

18

www.getschoolcraft.com

www.fraumohrstrasselbande.at



MATHEMATIK - GRÖßEN 2. Klasse

19

www.getschoolcraft.com

www.fraumohrsrasselbande.at



MATHEMATIK - GRÖßEN 2. Klasse

20

www.getschoolcraft.com

www.fraumohrsrasselbande.at



MATHEMATIK - GRÖßEN 2. Klasse

21

www.getschoolcraft.com

www.frau.mohr.srassemblbande.at



MATHEMATIK - GRÖßEN 2. Klasse

22

www.getschoolcraft.com

www.frau.mohr.srassemblbande.at



MATHEMATIK - GRÖßEN 2. Klasse

23

$23 \text{ €} + 35 \text{ €} = \underline{\quad} \text{ €}$

$54 \text{ €} + 21 \text{ €} = \underline{\quad} \text{ €}$

$56 \text{ €} + 41 \text{ €} = \underline{\quad} \text{ €}$

$36 \text{ €} + 53 \text{ €} = \underline{\quad} \text{ €}$

$13 \text{ €} + 66 \text{ €} = \underline{\quad} \text{ €}$

$74 \text{ €} + 26 \text{ €} = \underline{\quad} \text{ €}$

$52 \text{ €} + 28 \text{ €} = \underline{\quad} \text{ €}$

$65 \text{ €} + 32 \text{ €} = \underline{\quad} \text{ €}$

$72 \text{ €} + 14 \text{ €} = \underline{\quad} \text{ €}$

$81 \text{ €} + 16 \text{ €} = \underline{\quad} \text{ €}$

$57 \text{ €} + 42 \text{ €} = \underline{\quad} \text{ €}$

$35 \text{ €} + 45 \text{ €} = \underline{\quad} \text{ €}$

$82 \text{ €} + 12 \text{ €} = \underline{\quad} \text{ €}$

$57 \text{ €} + 43 \text{ €} = \underline{\quad} \text{ €}$

MATHEMATIK - GRÖßEN 2. Klasse

24

$23 \text{ €} + 8 \text{ €} = \underline{\quad} \text{ €}$

$54 \text{ €} + 8 \text{ €} = \underline{\quad} \text{ €}$

$56 \text{ €} + 7 \text{ €} = \underline{\quad} \text{ €}$

$36 \text{ €} + 5 \text{ €} = \underline{\quad} \text{ €}$

$13 \text{ €} + 9 \text{ €} = \underline{\quad} \text{ €}$

$74 \text{ €} + 7 \text{ €} = \underline{\quad} \text{ €}$

$52 \text{ €} + 9 \text{ €} = \underline{\quad} \text{ €}$

$65 \text{ €} + 6 \text{ €} = \underline{\quad} \text{ €}$

$75 \text{ €} + 7 \text{ €} = \underline{\quad} \text{ €}$

$88 \text{ €} + 3 \text{ €} = \underline{\quad} \text{ €}$

$57 \text{ €} + 6 \text{ €} = \underline{\quad} \text{ €}$

$35 \text{ €} + 9 \text{ €} = \underline{\quad} \text{ €}$

$82 \text{ €} + 9 \text{ €} = \underline{\quad} \text{ €}$

$57 \text{ €} + 7 \text{ €} = \underline{\quad} \text{ €}$

MATHEMATIK - GRÖßEN 2. Klasse

25

$30 \text{ c} + \underline{\quad\quad} = 1 \text{ €}$

$80 \text{ c} + \underline{\quad\quad} = 1 \text{ €}$

$40 \text{ c} + \underline{\quad\quad} = 1 \text{ €}$

$50 \text{ c} + \underline{\quad\quad} = 1 \text{ €}$

$50 \text{ c} + \underline{\quad\quad} = 1 \text{ €}$

$30 \text{ c} + \underline{\quad\quad} = 1 \text{ €}$

$70 \text{ c} + \underline{\quad\quad} = 1 \text{ €}$

$60 \text{ c} + \underline{\quad\quad} = 1 \text{ €}$

$10 \text{ c} + \underline{\quad\quad} = 1 \text{ €}$

$90 \text{ c} + \underline{\quad\quad} = 1 \text{ €}$

$20 \text{ c} + \underline{\quad\quad} = 1 \text{ €}$

$40 \text{ c} + \underline{\quad\quad} = 1 \text{ €}$

$60 \text{ c} + \underline{\quad\quad} = 1 \text{ €}$

$10 \text{ c} + \underline{\quad\quad} = 1 \text{ €}$

MATHEMATIK - GRÖßEN 2. Klasse

26

$35 \text{ c} + \underline{\quad\quad} = 1 \text{ €}$

$81 \text{ c} + \underline{\quad\quad} = 1 \text{ €}$

$42 \text{ c} + \underline{\quad\quad} = 1 \text{ €}$

$58 \text{ c} + \underline{\quad\quad} = 1 \text{ €}$

$57 \text{ c} + \underline{\quad\quad} = 1 \text{ €}$

$34 \text{ c} + \underline{\quad\quad} = 1 \text{ €}$

$76 \text{ c} + \underline{\quad\quad} = 1 \text{ €}$

$62 \text{ c} + \underline{\quad\quad} = 1 \text{ €}$

$12 \text{ c} + \underline{\quad\quad} = 1 \text{ €}$

$99 \text{ c} + \underline{\quad\quad} = 1 \text{ €}$

$24 \text{ c} + \underline{\quad\quad} = 1 \text{ €}$


$48 \text{ c} + \underline{\quad\quad} = 1 \text{ €}$

$66 \text{ c} + \underline{\quad\quad} = 1 \text{ €}$

$17 \text{ c} + \underline{\quad\quad} = 1 \text{ €}$

MATHEMATIK - GRÖßEN 2. Klasse

27



MATHEMATIK - GRÖßEN 2. Klasse

28



MATHEMATIK - GRÖßEN 2. Klasse

29

www.fraunmohrsrasselbande.at www.getschoolcraft.com



MATHEMATIK - GRÖßEN 2. Klasse


30

www.fraunmohrsrasselbande.at www.getschoolcraft.com



MATHEMATIK - GRÖßEN 2. Klasse


31



GRAMM



DEKAGRAMM





KILOGRAMM


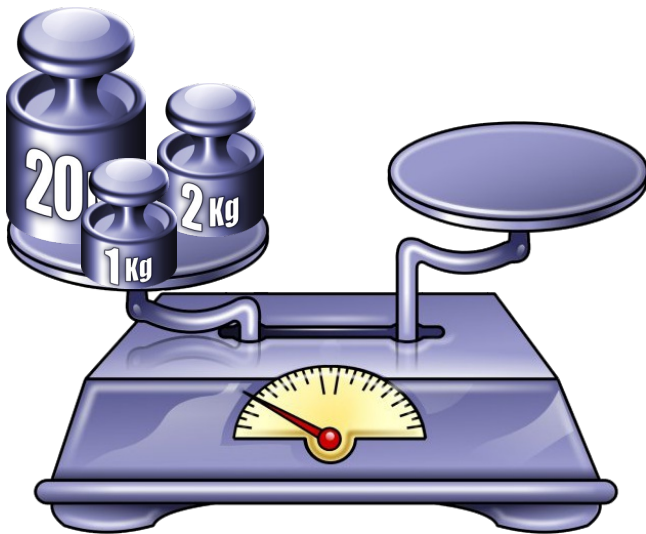

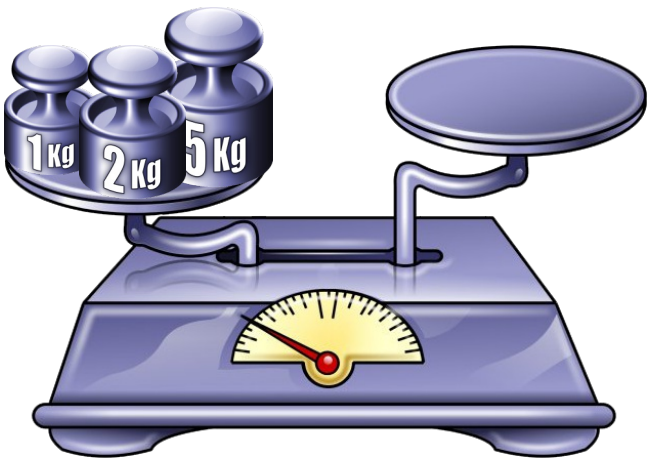



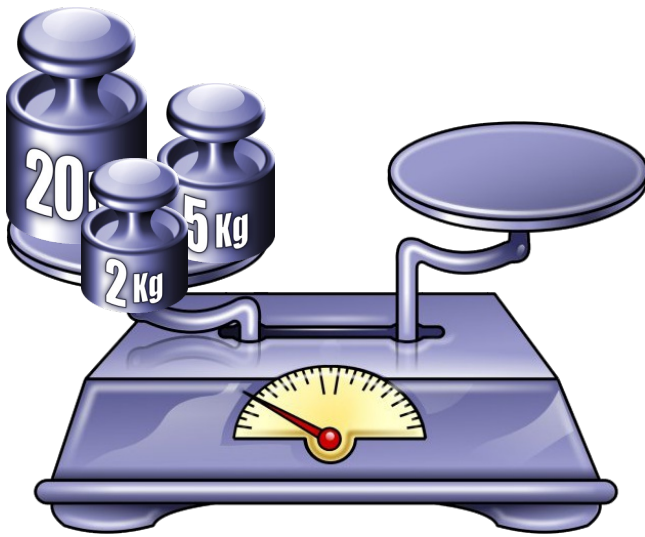


MATHEMATIK - GRÖßEN 2. Klasse




32











MATHEMATIK - GRÖßEN 2. Klasse

41

$$10 \text{ g} = 1 \text{ dag}$$

$$20 \text{ g} = \underline{\quad} \text{ dag}$$

$$30 \text{ g} = \underline{\quad} \text{ dag}$$

$$40 \text{ g} = \underline{\quad} \text{ dag}$$

$$50 \text{ g} = \underline{\quad} \text{ dag}$$

$$60 \text{ g} = \underline{\quad} \text{ dag}$$

$$70 \text{ g} = \underline{\quad} \text{ dag}$$

$$80 \text{ g} = \underline{\quad} \text{ dag}$$

$$90 \text{ g} = \underline{\quad} \text{ dag}$$

$$100 \text{ g} = \underline{\quad} \text{ dag}$$

MATHEMATIK - GRÖßEN 2. Klasse

42

$$1 \text{ dag} = 10 \text{ g}$$

$$2 \text{ dag} = \underline{\quad} \text{ g}$$

$$3 \text{ dag} = \underline{\quad} \text{ g}$$

$$4 \text{ dag} = \underline{\quad} \text{ g}$$

$$5 \text{ dag} = \underline{\quad} \text{ g}$$

$$6 \text{ dag} = \underline{\quad} \text{ g}$$

$$7 \text{ dag} = \underline{\quad} \text{ g}$$

$$8 \text{ dag} = \underline{\quad} \text{ g}$$

$$9 \text{ dag} = \underline{\quad} \text{ g}$$

$$10 \text{ dag} = \underline{\quad} \text{ g}$$

MATHEMATIK - GRÖßEN 2. Klasse

43

$$100 \text{ dag} = 1 \text{ kg}$$

$$40 \text{ dag} + \underline{\quad\quad} = 1 \text{ kg}$$

$$60 \text{ dag} + \underline{\quad\quad} = 1 \text{ kg}$$

$$70 \text{ dag} + \underline{\quad\quad} = 1 \text{ kg}$$

$$30 \text{ dag} + \underline{\quad\quad} = 1 \text{ kg}$$

$$80 \text{ dag} + \underline{\quad\quad} = 1 \text{ kg}$$

$$50 \text{ dag} + \underline{\quad\quad} = 1 \text{ kg}$$

$$20 \text{ dag} + \underline{\quad\quad} = 1 \text{ kg}$$

$$10 \text{ dag} + \underline{\quad\quad} = 1 \text{ kg}$$

$$90 \text{ dag} + \underline{\quad\quad} = 1 \text{ kg}$$

MATHEMATIK - GRÖßEN 2. Klasse

44

$$100 \text{ dag} = 1 \text{ kg}$$

$$42 \text{ dag} + \underline{\quad\quad} = 1 \text{ kg}$$

$$64 \text{ dag} + \underline{\quad\quad} = 1 \text{ kg}$$

$$75 \text{ dag} + \underline{\quad\quad} = 1 \text{ kg}$$

$$38 \text{ dag} + \underline{\quad\quad} = 1 \text{ kg}$$

$$82 \text{ dag} + \underline{\quad\quad} = 1 \text{ kg}$$

$$55 \text{ dag} + \underline{\quad\quad} = 1 \text{ kg}$$

$$26 \text{ dag} + \underline{\quad\quad} = 1 \text{ kg}$$

$$19 \text{ dag} + \underline{\quad\quad} = 1 \text{ kg}$$

$$92 \text{ dag} + \underline{\quad\quad} = 1 \text{ kg}$$



1 l = 1 Liter

Flüssigkeiten misst man mit der Maßeinheit

LITER.



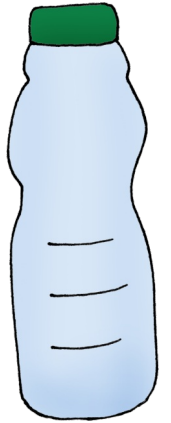
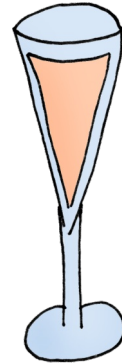


Was glaubst du? Wie viele Liter passen hinein?



MATHEMATIK - GRÖßEN 2. Klasse

47

Was glaubst du? Wie viele Liter passen hinein?



MATHEMATIK - GRÖßEN 2. Klasse

48


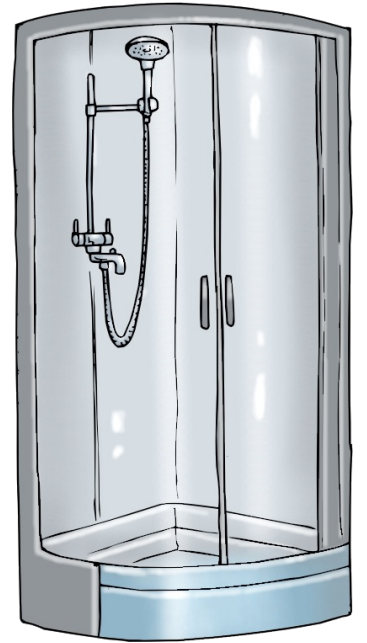
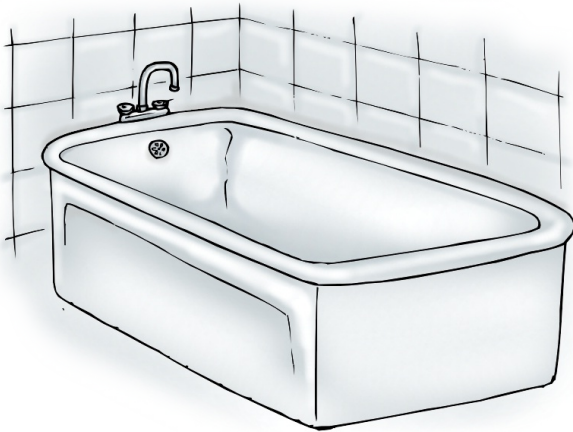
Was glaubst du? Ist das mehr oder weniger als ein Liter oder vielleicht auch ganz genau ein Liter?



MATHEMATIK - GRÖßEN 2. Klasse

49




Was glaubst du? Wie viele Liter braucht man?



MATHEMATIK - GRÖßEN 2. Klasse


50

Was glaubst du? Ist das mehr oder weniger als ein Liter oder vielleicht auch ganz genau ein Liter?






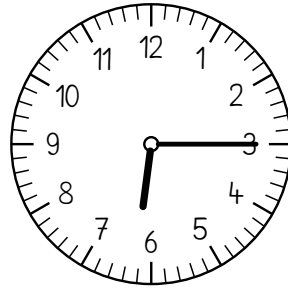
Die Uhrzeit gibt man in
Stunden und Minuten
an!



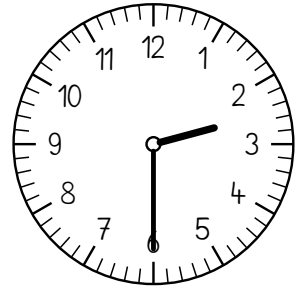
17:00 Uhr



16:30 Uhr




6:15 Uhr




14:30 Uhr




Wie spät ist es?




14:00 Uhr



17:00 Uhr




19:00 Uhr



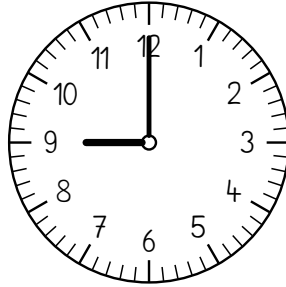
10:00 Uhr




Wie spät ist es?




12:00 Uhr



21:00 Uhr




8:00 Uhr




18:00 Uhr




Wie spät ist es?




20:00 Uhr



18:00 Uhr



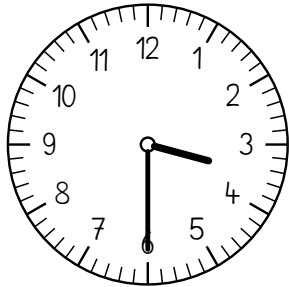
15:00 Uhr




1:00 Uhr



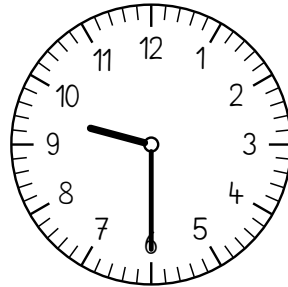
Wie spät ist es?




3:30 Uhr



22:30 Uhr




9:30 Uhr




7:30 Uhr




Wie spät ist es?



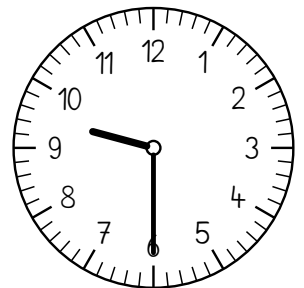
20:30 Uhr



0:30 Uhr




2:30 Uhr




9:30 Uhr



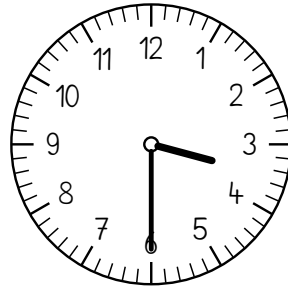
Wie spät ist es?




17:30 Uhr



8:30 Uhr




15:30 Uhr




0:30 Uhr




Wie spät ist es?




10:15 Uhr



16:15 Uhr




1:45 Uhr



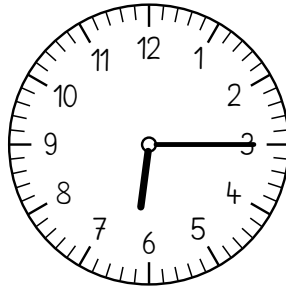
12:15 Uhr




Wie spät ist es?



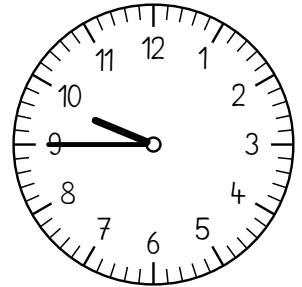
15:15 Uhr



18:15 Uhr




22:45 Uhr




21:45 Uhr




Wie spät ist es?




19:15 Uhr



5:45 Uhr



21:45 Uhr



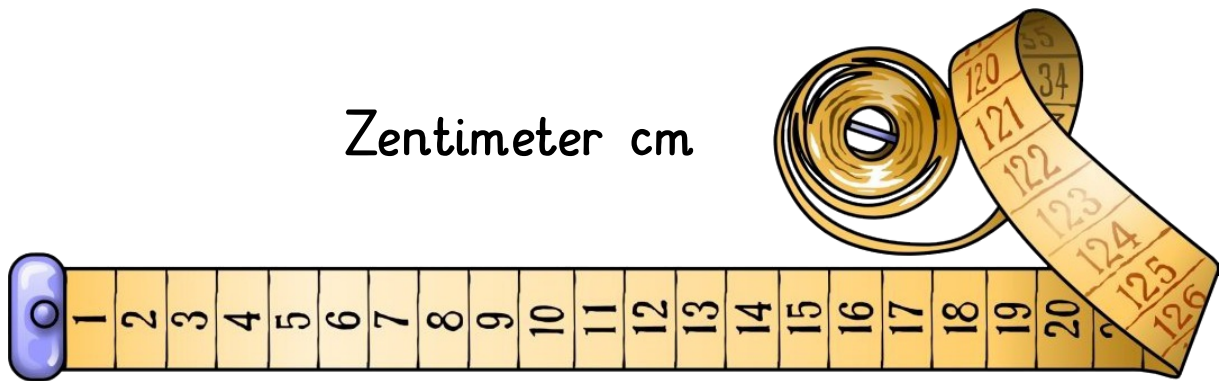
6:15 Uhr

Wenn man wissen will, wie lang oder breit oder wie hoch etwas ist, benutzt man zum Messen die **Längenmaße.**

Meter m

Dezimeter dm

Zentimeter cm





Was glaubst du? Wie viele Meter sind das?



Was glaubst du? Größer oder kleiner als 1 m?

63



Was glaubst du? Größer oder kleiner als 1 m?

64


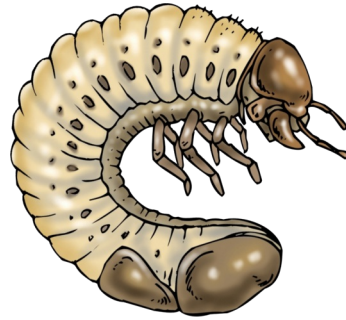




Was glaubst du? Mehr oder weniger als 1 cm?

65

www.getschoolcraft.com

www.fraumohrrasselbande.at



Was glaubst du? Wie viele cm sind das?

66

www.getschoolcraft.com

www.fraumohrrasselbande.at



MATHEMATIK - GRÖßEN 2. Klasse

67

$$10 \text{ cm} = 1 \text{ dm}$$

$$20 \text{ cm} = \underline{\quad} \text{ dm}$$

$$30 \text{ cm} = \underline{\quad} \text{ dm}$$

$$40 \text{ cm} = \underline{\quad} \text{ dm}$$

$$50 \text{ cm} = \underline{\quad} \text{ dm}$$

$$60 \text{ cm} = \underline{\quad} \text{ dm}$$

$$70 \text{ cm} = \underline{\quad} \text{ dm}$$

$$80 \text{ cm} = \underline{\quad} \text{ dm}$$

$$90 \text{ cm} = \underline{\quad} \text{ dm}$$

$$100 \text{ cm} = \underline{\quad} \text{ dm}$$

MATHEMATIK - GRÖßEN 2. Klasse

68

$$1 \text{ dm} = 10 \text{ cm}$$

$$2 \text{ dm} = \underline{\quad} \text{ cm}$$

$$3 \text{ dm} = \underline{\quad} \text{ cm}$$

$$4 \text{ dm} = \underline{\quad} \text{ cm}$$

$$5 \text{ dm} = \underline{\quad} \text{ cm}$$

$$6 \text{ dm} = \underline{\quad} \text{ cm}$$

$$7 \text{ dm} = \underline{\quad} \text{ cm}$$

$$8 \text{ dm} = \underline{\quad} \text{ cm}$$

$$9 \text{ dm} = \underline{\quad} \text{ cm}$$

$$10 \text{ dm} = \underline{\quad} \text{ cm}$$

$$10 \text{ dm} = 1 \text{ m}$$

$$20 \text{ dm} = \underline{\quad} \text{ m}$$

$$30 \text{ dm} = \underline{\quad} \text{ m}$$

$$40 \text{ dm} = \underline{\quad} \text{ m}$$

$$50 \text{ dm} = \underline{\quad} \text{ m}$$

$$60 \text{ dm} = \underline{\quad} \text{ m}$$

$$70 \text{ dm} = \underline{\quad} \text{ m}$$

$$80 \text{ dm} = \underline{\quad} \text{ m}$$

$$90 \text{ dm} = \underline{\quad} \text{ m}$$

$$100 \text{ dm} = \underline{\quad} \text{ m}$$

$$1 \text{ m} = 10 \text{ dm}$$

$$2 \text{ m} = \underline{\quad} \text{ dm}$$

$$3 \text{ m} = \underline{\quad} \text{ dm}$$

$$4 \text{ m} = \underline{\quad} \text{ dm}$$

$$5 \text{ m} = \underline{\quad} \text{ dm}$$

$$6 \text{ m} = \underline{\quad} \text{ dm}$$

$$7 \text{ m} = \underline{\quad} \text{ dm}$$

$$8 \text{ m} = \underline{\quad} \text{ dm}$$

$$9 \text{ m} = \underline{\quad} \text{ dm}$$

$$10 \text{ m} = \underline{\quad} \text{ dm}$$